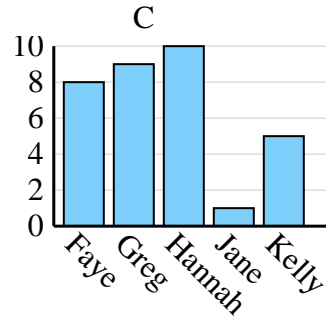
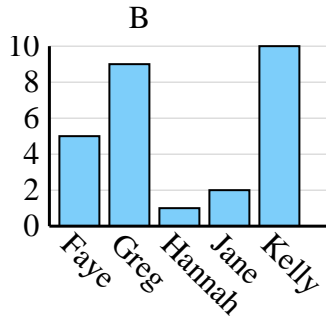
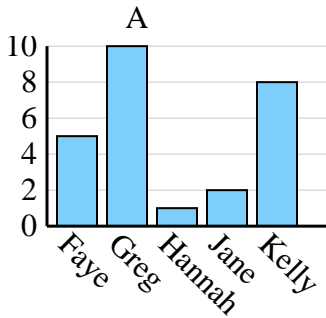




Determine which graph (A, B or C) best represents the information in the table.

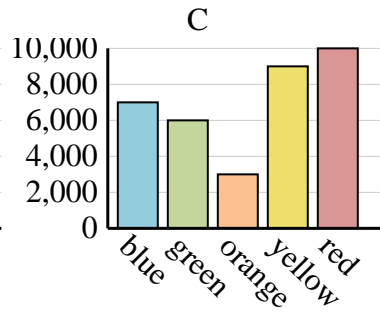
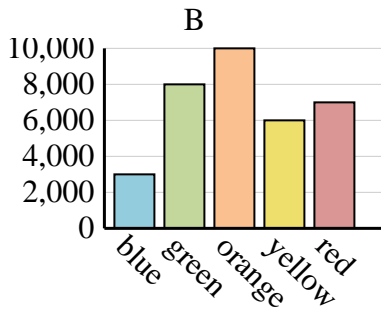
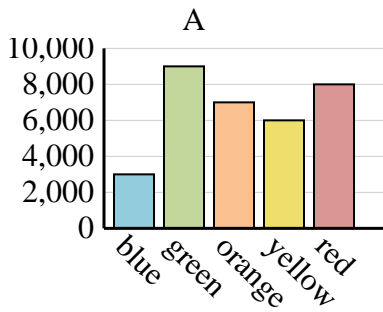
Answers

Name	Faye	Greg	Hannah	Jane	Kelly
States Lived In	5	10	1	2	8

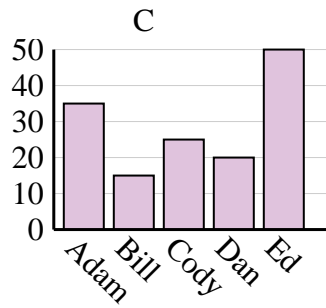
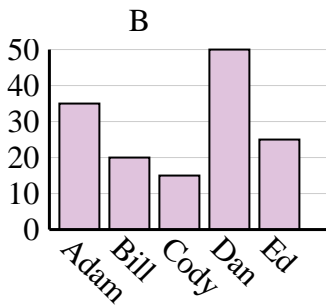
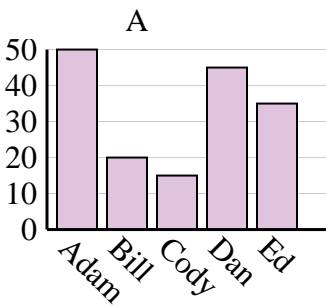


1. _____
2. _____
3. _____
4. _____

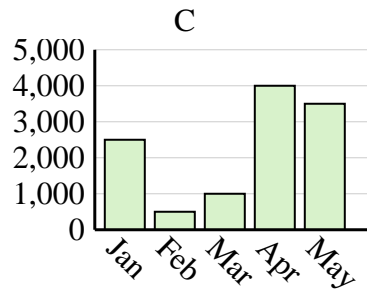
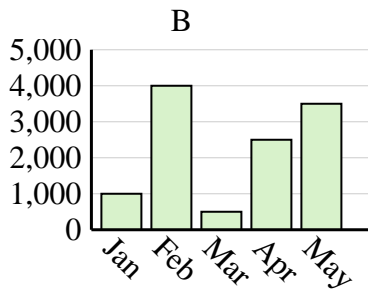
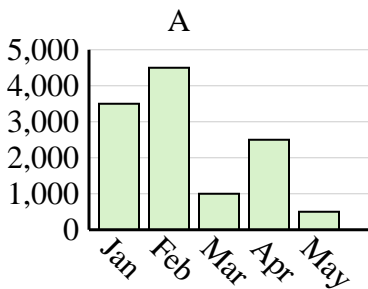
Favorite Color	blue	green	orange	yellow	red
People	3,000	9,000	7,000	6,000	8,000



Name	Adam	Bill	Cody	Dan	Ed
Points	35	20	15	50	25



Sales	Jan	Feb	Mar	Apr	May
Month	3,500	4,500	1,000	2,500	500

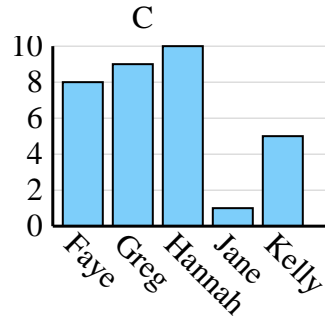
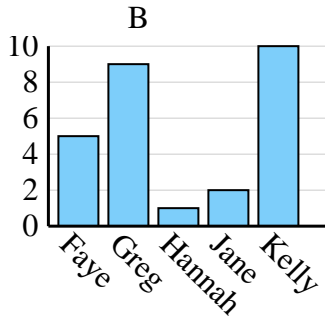
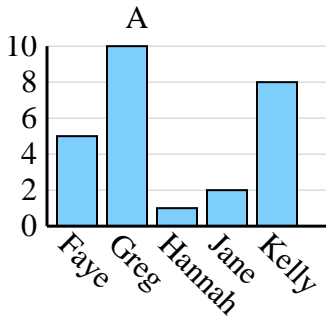




Determine which graph (A, B or C) best represents the information in the table.

Answers

Name	Faye	Greg	Hannah	Jane	Kelly
States Lived In	5	10	1	2	8



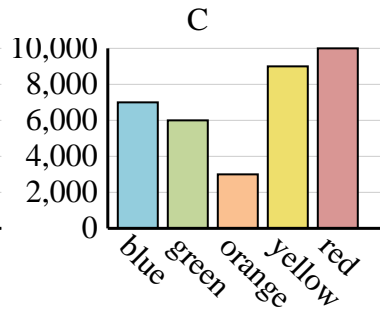
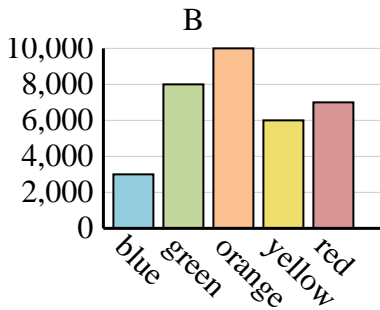
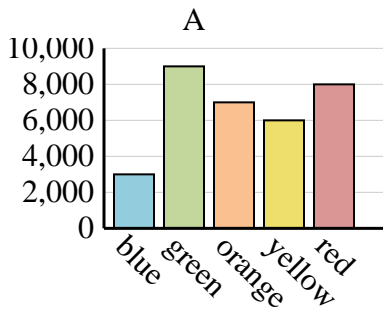
1. **A**

2. **A**

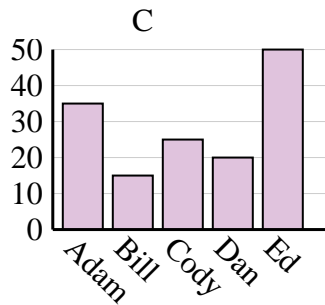
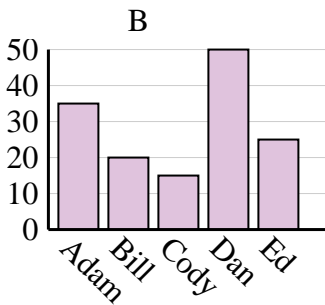
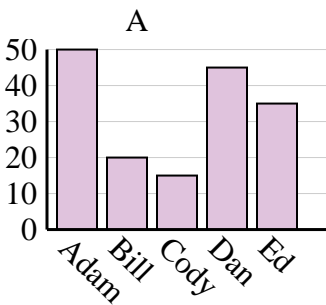
3. **B**

4. **A**

Favorite Color	blue	green	orange	yellow	red
People	3,000	9,000	7,000	6,000	8,000



Name	Adam	Bill	Cody	Dan	Ed
Points	35	20	15	50	25



Sales	Jan	Feb	Mar	Apr	May
Month	3,500	4,500	1,000	2,500	500

